

Name _____


Lady Bugaboo

A ladybug is a type of beetle. Different types of ladybugs can have 0 or up to 20 black spots on their backs. Find the number of spots on each ladybug. Then write the letter of the ladybug at the bottom of the page that has two times the number of spots as the ladybug at the top of the page.


1.




2.




3.




4.




5.




6.




7.




8.



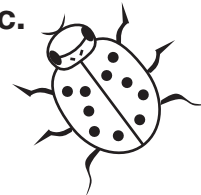
a.




b.



c.



d.



e.



f.



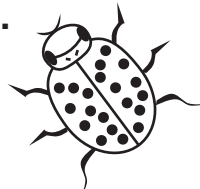
g.



h.



i.



j.

